

Solve each problem.


**Answers**

1) Dave spent \$10.46 buying some new toys. He bought them using a twenty dollar bill. How much change should he get back?




- 1. \_\_\_\_\_
- 2. \_\_\_\_\_
- 3. \_\_\_\_\_

2) Robin bought a new board game for \$7.90. She gave the cashier a ten dollar bill. How much change should she get back?



3) At the book fair Will spent \$12.53 buying books. He gave the cashier a twenty dollar bill. How much change should he get back?






Solve each problem.


1) Dave spent \$10.46 buying some new toys. He bought them using a twenty dollar bill. How much change should he get back?



2) Robin bought a new board game for \$7.90. She gave the cashier a ten dollar bill. How much change should she get back?



3) At the book fair Will spent \$12.53 buying books. He gave the cashier a twenty dollar bill. How much change should he get back?



**Answers**

1. **C**

2. **C**

3. **C**